



Name \_\_\_\_\_

Date \_\_\_\_\_

### Math Activity: All Aboard Multiplication

#### ✓ What I Practiced

What math skills did you use to make the correct space team?

☐ Problem solving

☐ Other:

☐ Comparing quantities



☐ Multiplying numbers

#### ⚙️ How I Solved It


How many of each Factorbot are in the spaceship?

Clues:

There are 3 times as many  as 

There are 2 times as many  as 

Y = yellow G = green P = purple





#### 📌 Next Steps

Make up your own puzzle. Show the solution.

Clues:

There are  times as many  as 

There are  times as many  as 

Y = yellow G = green P = purple

