

Name \_\_\_\_\_

Date \_\_\_\_\_

## Math Game: Candy Challenge



### ✓ What I Practiced



What helped you figure out each candy's cost?

- ☐ Working step by step ☐ Other:
- ☐ Subtracting known prices
- ☐ Dividing identical candies



### ⚙️ How I Solved It



Solve the puzzle.

24¢  20¢ 

 =   =

Solve the puzzle.

30¢  28¢ 

 =   =

### 📌 Next Steps

What was tricky about solving the candy puzzles?

What would make it easier?

- ☐ Writing a math equation ☐ Other:
- ☐ Checking my work