

Name _____

Date _____

Math Activity: Math Challenge 5















✓ What I Practiced

What helped you solve the number challenges?

- Tried different numbers
 Other:
- Used logic and number sense
- Looked for patterns and relationships

⚙️ How I Solved It

Solve the puzzle.
Explain your thinking.

	+		=	50			=	<input style="width: 40px; height: 20px;" type="text"/>		
	-		=	12			=	<input style="width: 40px; height: 20px;" type="text"/>		
	+		+		+		=	90		
	+		+		=	<input style="width: 40px; height: 20px;" type="text"/>			=	<input style="width: 40px; height: 20px;" type="text"/>

📌 Next Steps

What was challenging about these puzzles?

What will help you do better next time?

- Start with simpler equations
 Other:
- Label the parts I know