

Name _____

Date _____

Math Game: Reflect and Rotate

✓ What I Practiced

What skills did you use while playing the game?

☐ Reflecting shapes

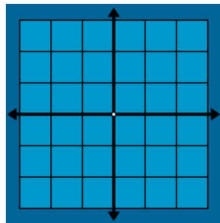
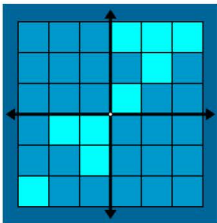
☐ Other:

☐ Rotating shapes

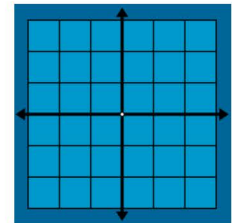
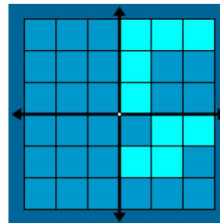
☐ Visualizing how shapes move

⚙️ How I Solved It

Reflect the shape
across the x-axis.



Rotate the shape 90 degrees.
(counter-clockwise)



📌 Next Steps

What made it challenging to transform the shapes?

What will you try next time?

☐ Predict the final position first

☐ Other:

☐ Practice one transformation at a time