

Name _____

Date _____

Math Game: Sum Blocks




✓ What I Practiced

What helped you solve the number puzzles?

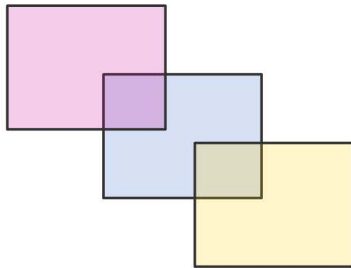
- ☐ Looked for number combinations ☐ Other:
- ☐ Focused on overlapping areas
- ☐ Used logic to test combinations

⚙️ How I Solved It

Solve the puzzle.

14 16 13




1	4	5
7	8	9

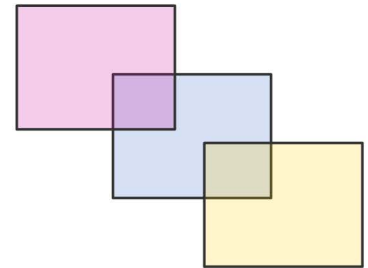


Solve the puzzle.

15 20 18




3	4	6
7	8	9



📌 Next Steps

What was tricky about solving the puzzles?

What would make it easier?

- ☐ Start with the overlap areas ☐ Other:
- ☐ Look for combinations first